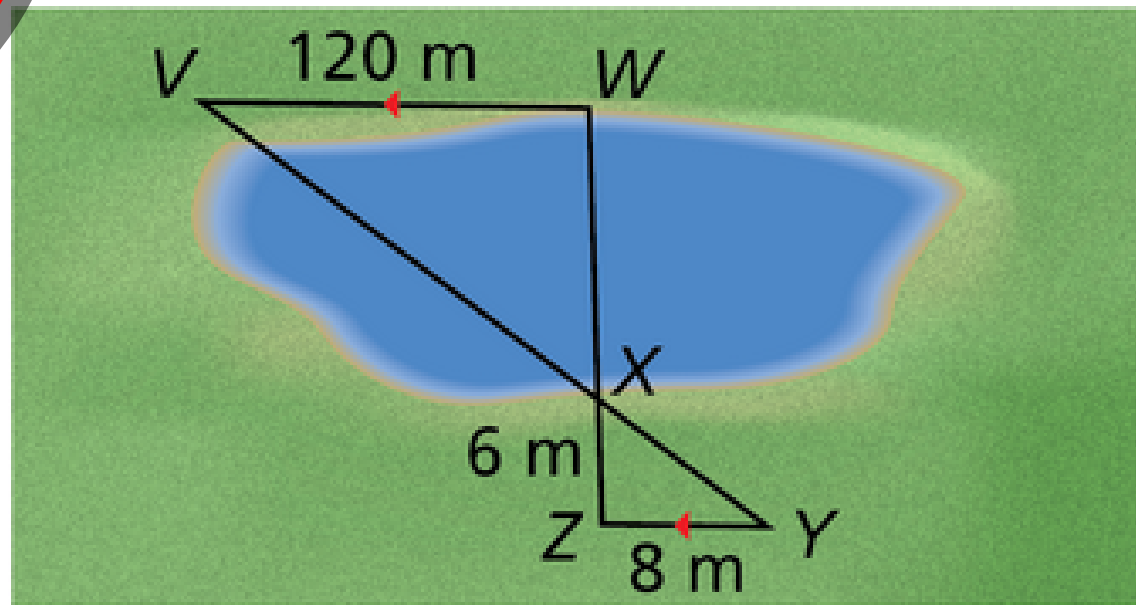




“Help” and “Live Tutor” features do not appear until a student takes a series of actions.

You can calculate the width of the lake using a surveying technique, as shown in the diagram. Find the width of the lake.

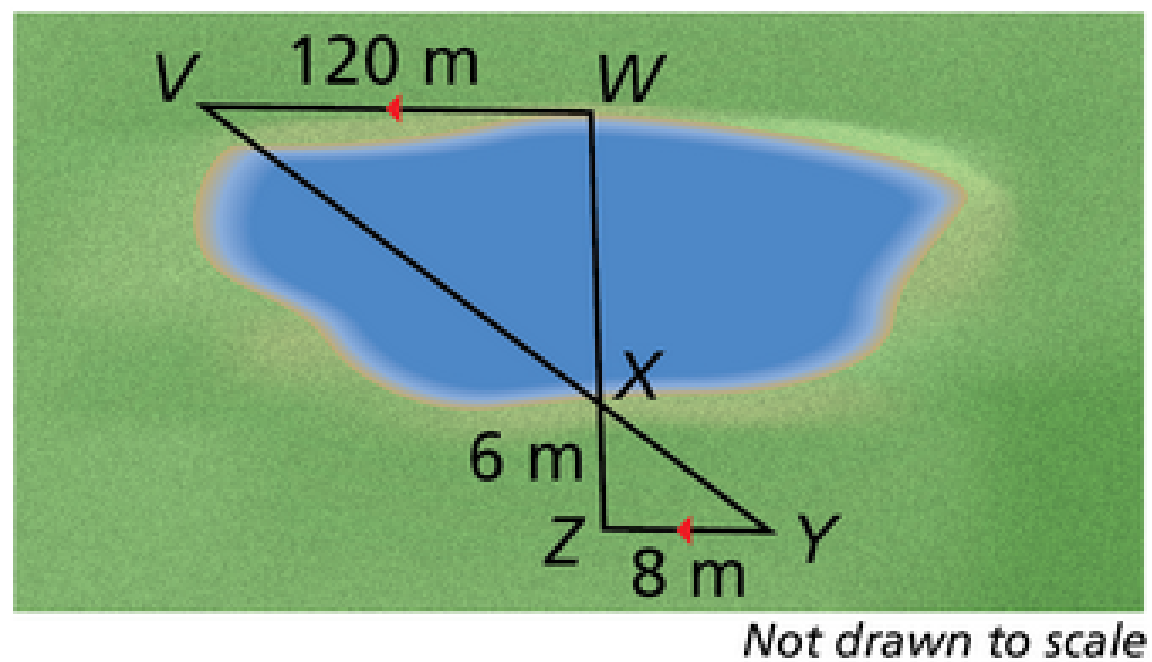


Not drawn to scale

The width of the lake is meters.



You can calculate the width of the lake using a surveying technique, as shown in the diagram.
Find the width of the lake.



The width of the lake is meters.

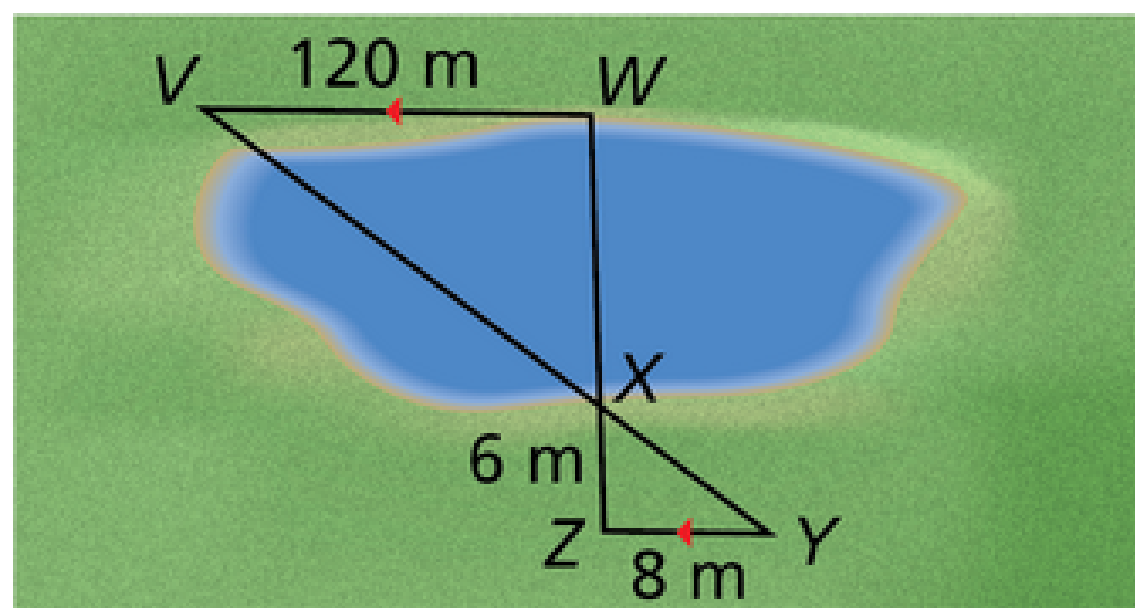
Once Kathy enters her answer to the item, the "Check Answer" button appears.

CHECK ANSWER



2 of 20 answered

You can calculate the width of the lake using a surveying technique, as shown in the diagram.
Find the width of the lake.



Not drawn to scale

If her answer is incorrect, the "Need Help?" button appears.

The width of the lake is meters.

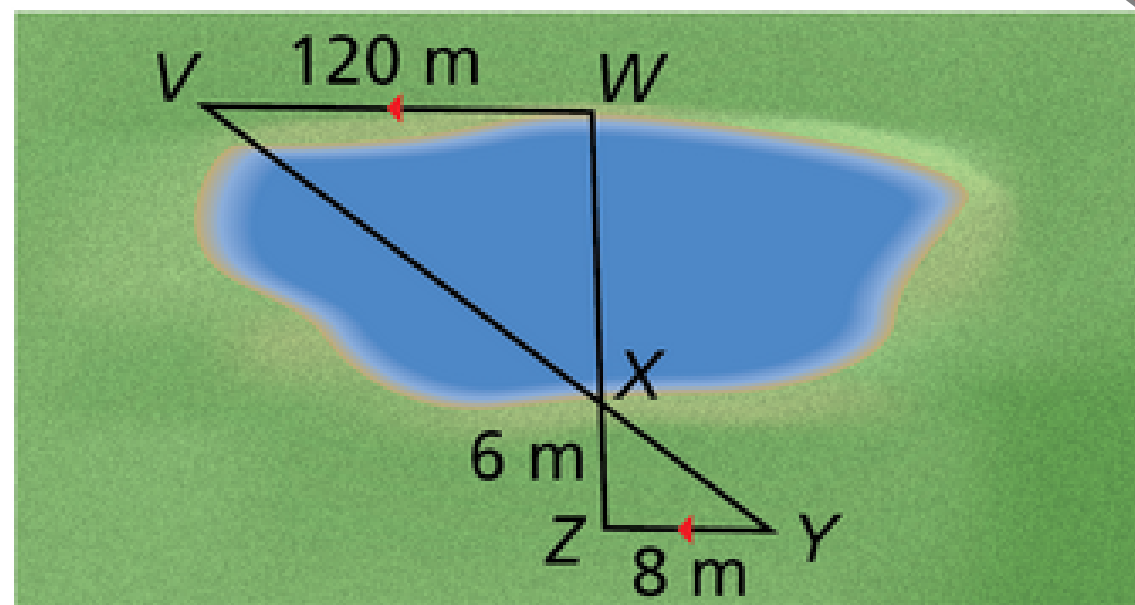
NEED HELP?

CHECK ANSWER



Clicking on the "Need Help?" button provides Kathy with videos and lessons to help her remediate on the item's topic.

You can calculate the width of the lake using a survey. Find the width of the lake.



Not drawn to scale

The width of the lake is meters.

Help

Having trouble? Try this first:

Using the AA Similarity Theorem

[WATCH VIDEO](#)

[REVIEW LESSON](#)

Need more help? Give these a try, too:

Using similarity statements

[WATCH VIDEO](#)

[REVIEW LESSON](#)

Using angle relationships

[WATCH VIDEO](#)

[REVIEW LESSON](#)

Using the Vertical Angles Congruence Theorem

[WATCH VIDEO](#)

[REVIEW LESSON](#)

Writing a proportion

[WATCH VIDEO](#)

[REVIEW LESSON](#)

[See Multi-Language Glossary](#)

NEED HELP?

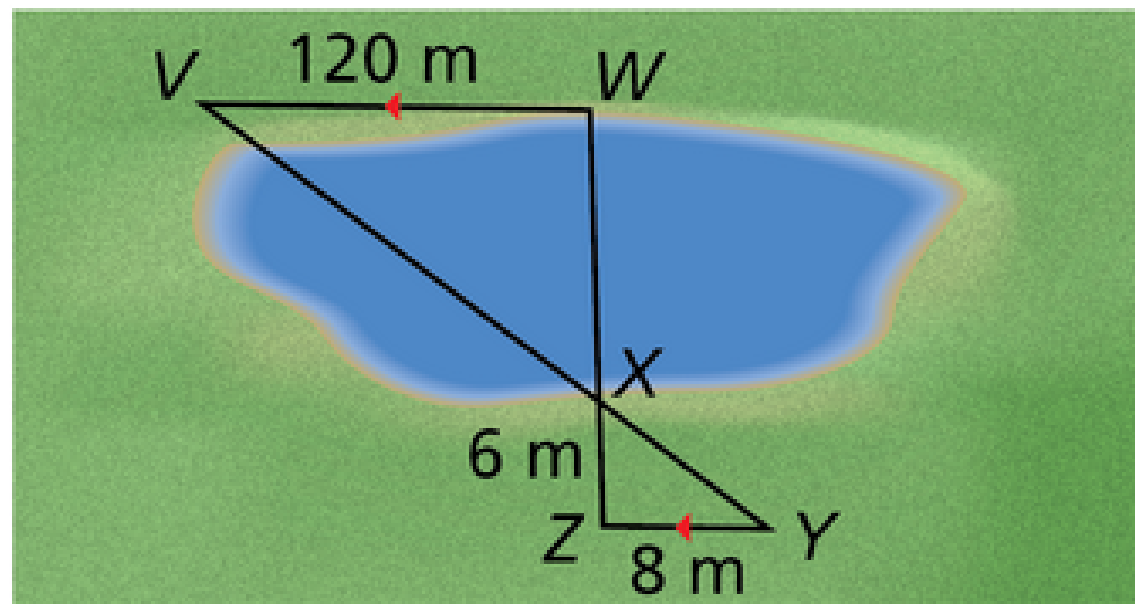
CHECK ANSWER

3



Kathy can enter new answers and continue to check them.

You can calculate the width of the lake using a surveying technique, as shown in the diagram. Find the width of the lake.



Not drawn to scale

The width of the lake is meters.

If Kathy has reviewed the remediation but missed her second attempt at the question, the "Live Tutor" button will become available.

LIVE TUTOR

NEED HELP?

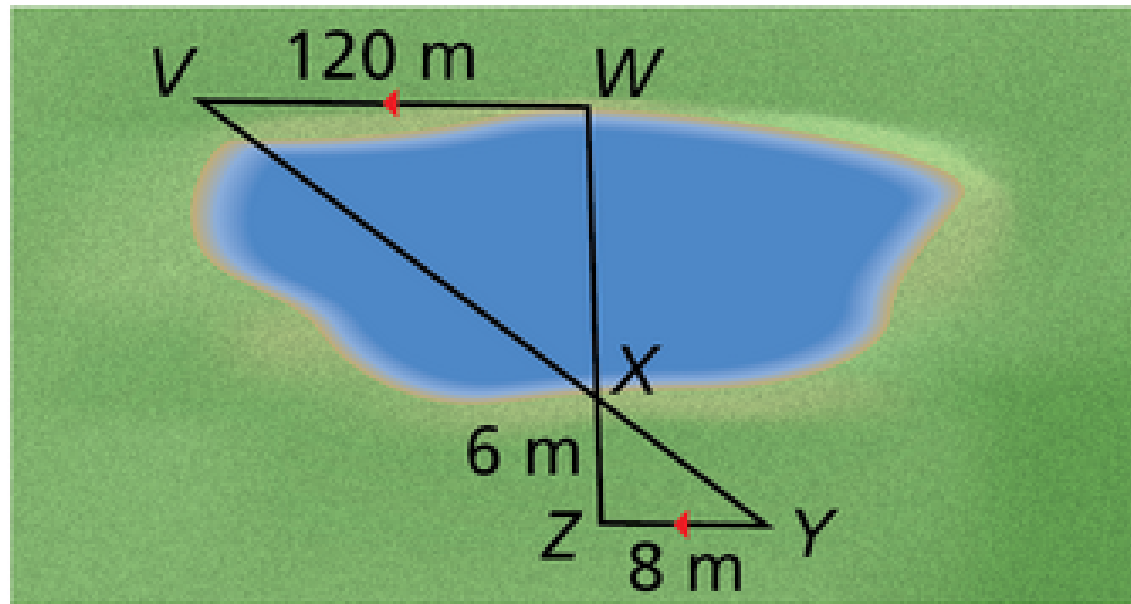
CHECK ANSWER

3



The Big Ideas Learning Tutor will be available to help Kathy with the item.

You can calculate the width of the lake using a survey. Find the width of the lake.



Not drawn to scale

3

The width of the lake is meters.

Live Tutor



Big Ideas Learning

Hello. How can I help you today?



You

I'm having trouble with this problem...

Big Ideas Learning is composing a message...

Send a message

Send

LIVE TUTOR

NEED HELP?

CHECK ANSWER